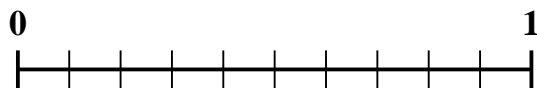




Use the number line to solve each problem.

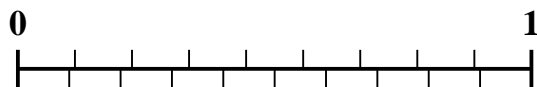
1) Which amount is larger,  $\frac{4}{10}$  or 0.25?



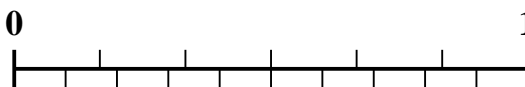
2) Which amount is larger,  $\frac{1}{2}$  or 0.35?



3) Which amount is larger,  $\frac{2}{9}$  or 0.12?



4) Which amount is larger,  $\frac{4}{6}$  or 0.47?



5) Which amount is larger,  $\frac{7}{9}$  or 0.89?



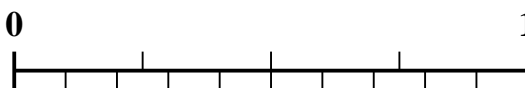
6) Which amount is larger,  $\frac{1}{7}$  or 0.32?




7) Which amount is larger,  $\frac{5}{7}$  or 0.54?



8) Which amount is larger,  $\frac{3}{4}$  or 0.89?



9) Which amount is larger,  $\frac{4}{5}$  or 0.6?



10) Which amount is larger,  $\frac{1}{8}$  or 0.3?



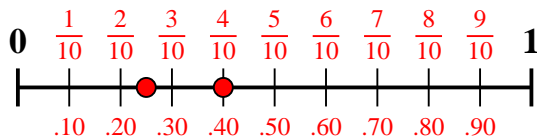
**Answers**

1. \_\_\_\_\_
2. \_\_\_\_\_
3. \_\_\_\_\_
4. \_\_\_\_\_
5. \_\_\_\_\_
6. \_\_\_\_\_
7. \_\_\_\_\_
8. \_\_\_\_\_
9. \_\_\_\_\_
10. \_\_\_\_\_

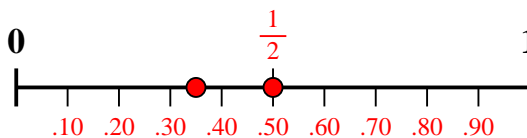


Use the number line to solve each problem.

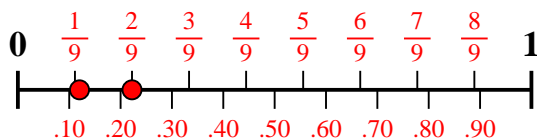
1) Which amount is larger,  $\frac{4}{10}$  or 0.25?



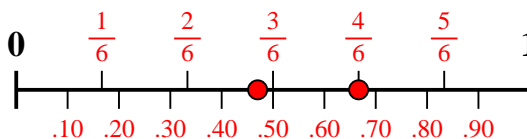
2) Which amount is larger,  $\frac{1}{2}$  or 0.35?



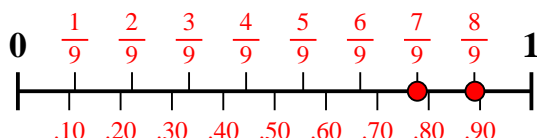
3) Which amount is larger,  $\frac{2}{9}$  or 0.12?



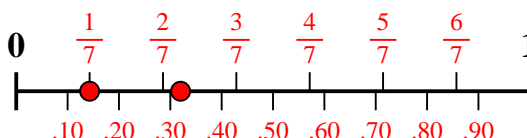
4) Which amount is larger,  $\frac{4}{6}$  or 0.47?



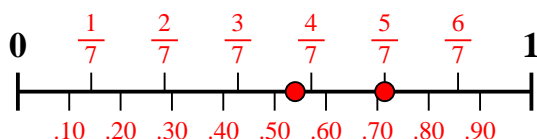
5) Which amount is larger,  $\frac{7}{9}$  or 0.89?



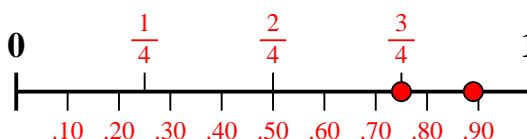
6) Which amount is larger,  $\frac{1}{7}$  or 0.32?



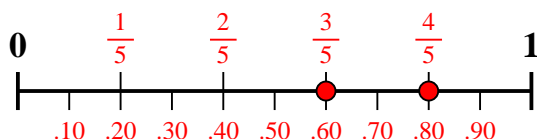
7) Which amount is larger,  $\frac{5}{7}$  or 0.54?



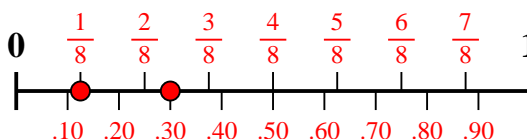
8) Which amount is larger,  $\frac{3}{4}$  or 0.89?



9) Which amount is larger,  $\frac{4}{5}$  or 0.6?



10) Which amount is larger,  $\frac{1}{8}$  or 0.3?



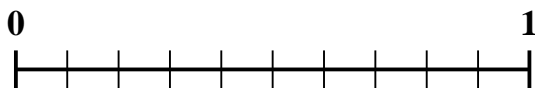
**Answers**

1.  $\frac{4}{10}$
2.  $\frac{1}{2}$
3.  $\frac{2}{9}$
4.  $\frac{4}{6}$
5. **0.89**
6. **0.32**
7.  $\frac{5}{7}$
8. **0.89**
9.  $\frac{4}{5}$
10. **0.3**



Use the number line to solve each problem.

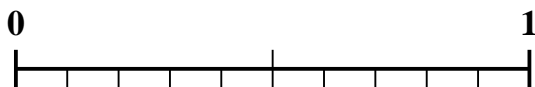
1) Which amount is larger,  $\frac{4}{10}$  or 0.52?



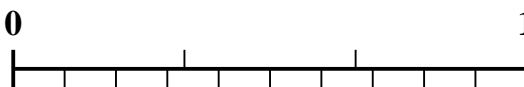
2) Which amount is larger,  $\frac{1}{4}$  or 0.39?



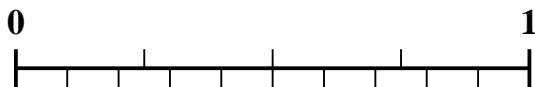
3) Which amount is larger,  $\frac{1}{2}$  or 0.64?



4) Which amount is larger,  $\frac{2}{3}$  or 0.55?



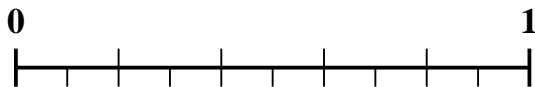
5) Which amount is larger,  $\frac{3}{4}$  or 0.9?



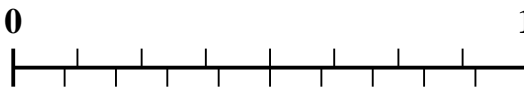
6) Which amount is larger,  $\frac{8}{9}$  or 0.75?



7) Which amount is larger,  $\frac{1}{5}$  or 0.39?



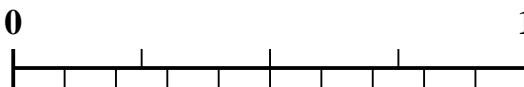
8) Which amount is larger,  $\frac{6}{8}$  or 0.6?



9) Which amount is larger,  $\frac{5}{7}$  or 0.54?



10) Which amount is larger,  $\frac{2}{4}$  or 0.34?



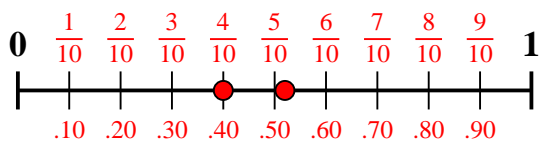
**Answers**

1. \_\_\_\_\_
2. \_\_\_\_\_
3. \_\_\_\_\_
4. \_\_\_\_\_
5. \_\_\_\_\_
6. \_\_\_\_\_
7. \_\_\_\_\_
8. \_\_\_\_\_
9. \_\_\_\_\_
10. \_\_\_\_\_

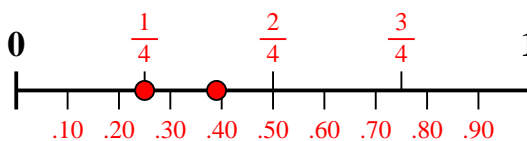


Use the number line to solve each problem.

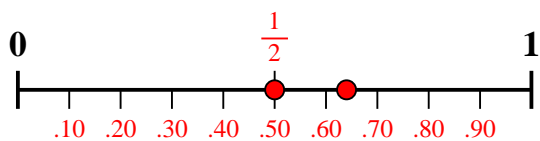
1) Which amount is larger,  $\frac{4}{10}$  or 0.52?



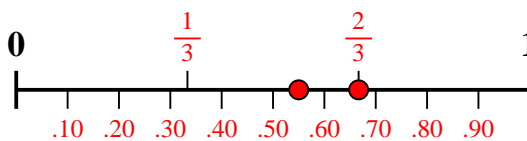
2) Which amount is larger,  $\frac{1}{4}$  or 0.39?



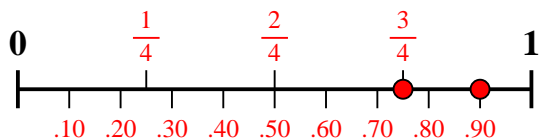
3) Which amount is larger,  $\frac{1}{2}$  or 0.64?



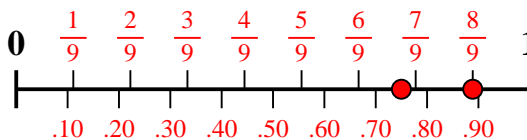
4) Which amount is larger,  $\frac{2}{3}$  or 0.55?



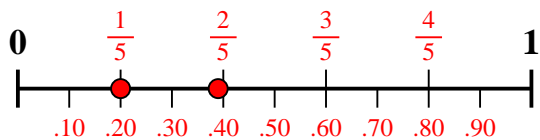
5) Which amount is larger,  $\frac{3}{4}$  or 0.9?



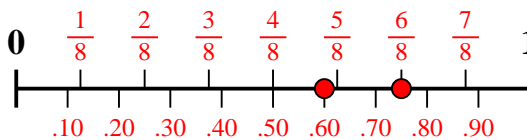
6) Which amount is larger,  $\frac{8}{9}$  or 0.75?



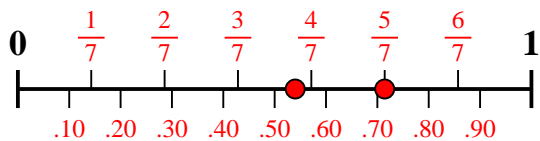
7) Which amount is larger,  $\frac{1}{5}$  or 0.39?



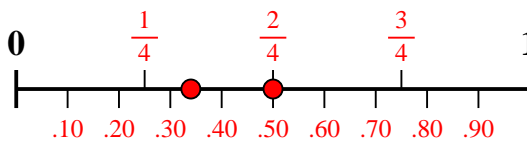
8) Which amount is larger,  $\frac{6}{8}$  or 0.6?



9) Which amount is larger,  $\frac{5}{7}$  or 0.54?



10) Which amount is larger,  $\frac{2}{4}$  or 0.34?



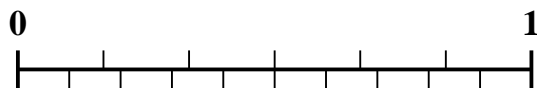
Answers

1. 0.52
2. 0.39
3. 0.64
4.  $\frac{2}{3}$
5. 0.9
6.  $\frac{8}{9}$
7. 0.39
8.  $\frac{6}{8}$
9.  $\frac{5}{7}$
10.  $\frac{2}{4}$

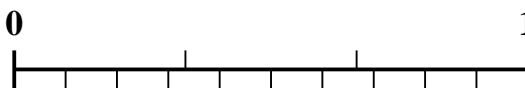


Use the number line to solve each problem.

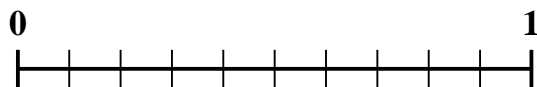
1) Which amount is larger,  $\frac{2}{6}$  or 0.15?



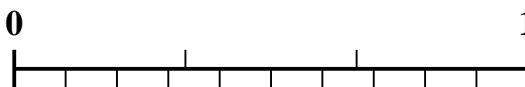
2) Which amount is larger,  $\frac{1}{3}$  or 0.52?



3) Which amount is larger,  $\frac{9}{10}$  or 0.79?



4) Which amount is larger,  $\frac{2}{3}$  or 0.87?



5) Which amount is larger,  $\frac{5}{7}$  or 0.57?



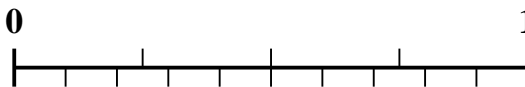
6) Which amount is larger,  $\frac{3}{6}$  or 0.31?



7) Which amount is larger,  $\frac{3}{9}$  or 0.15?



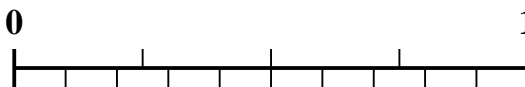
8) Which amount is larger,  $\frac{3}{4}$  or 0.9?



9) Which amount is larger,  $\frac{2}{9}$  or 0.4?



10) Which amount is larger,  $\frac{1}{4}$  or 0.13?



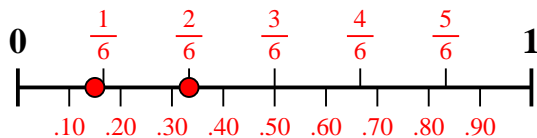
Answers

1. \_\_\_\_\_
2. \_\_\_\_\_
3. \_\_\_\_\_
4. \_\_\_\_\_
5. \_\_\_\_\_
6. \_\_\_\_\_
7. \_\_\_\_\_
8. \_\_\_\_\_
9. \_\_\_\_\_
10. \_\_\_\_\_

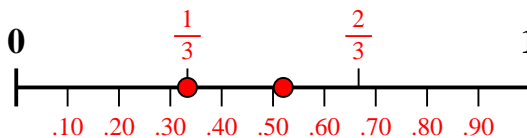


Use the number line to solve each problem.

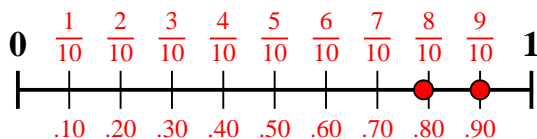
1) Which amount is larger,  $\frac{2}{6}$  or 0.15?



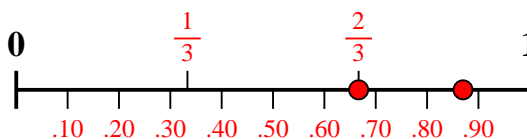
2) Which amount is larger,  $\frac{1}{3}$  or 0.52?



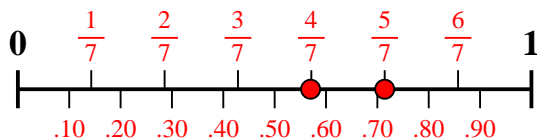
3) Which amount is larger,  $\frac{9}{10}$  or 0.79?



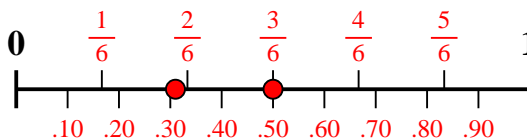
4) Which amount is larger,  $\frac{2}{3}$  or 0.87?



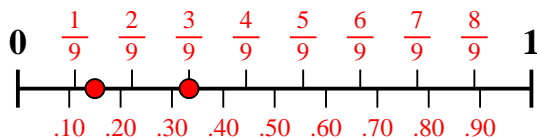
5) Which amount is larger,  $\frac{5}{7}$  or 0.57?



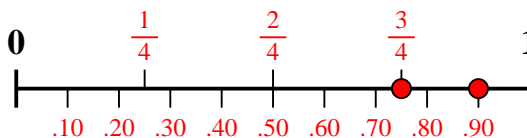
6) Which amount is larger,  $\frac{3}{6}$  or 0.31?



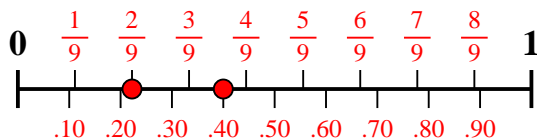
7) Which amount is larger,  $\frac{3}{9}$  or 0.15?



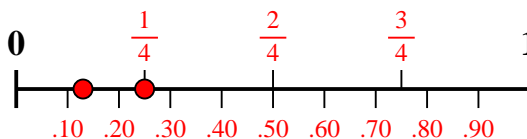
8) Which amount is larger,  $\frac{3}{4}$  or 0.9?



9) Which amount is larger,  $\frac{2}{9}$  or 0.4?



10) Which amount is larger,  $\frac{1}{4}$  or 0.13?



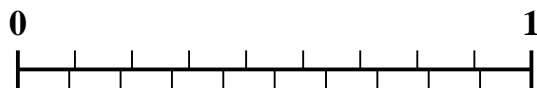
**Answers**

1.  $\frac{2}{6}$
2. **0.52**
3.  $\frac{9}{10}$
4. **0.87**
5.  $\frac{5}{7}$
6.  $\frac{3}{6}$
7.  $\frac{3}{9}$
8. **0.9**
9. **0.4**
10.  $\frac{1}{4}$

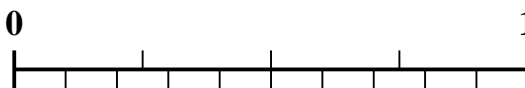


Use the number line to solve each problem.


1) Which amount is larger,  $\frac{2}{9}$  or 0.36?



2) Which amount is larger,  $\frac{1}{4}$  or 0.38?




3) Which amount is larger,  $\frac{1}{5}$  or 0.35?



4) Which amount is larger,  $\frac{4}{9}$  or 0.56?



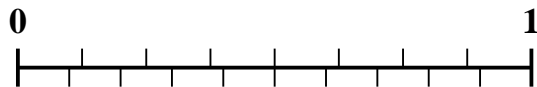
5) Which amount is larger,  $\frac{6}{10}$  or 0.48?



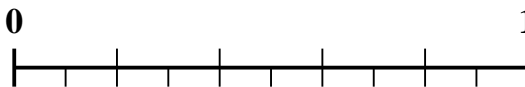
6) Which amount is larger,  $\frac{3}{9}$  or 0.15?



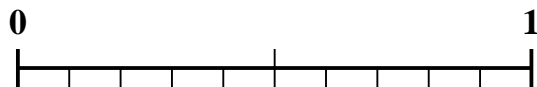
7) Which amount is larger,  $\frac{3}{8}$  or 0.49?



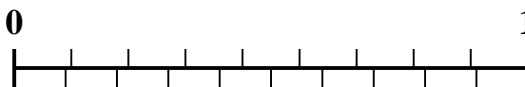
8) Which amount is larger,  $\frac{3}{5}$  or 0.71?



9) Which amount is larger,  $\frac{1}{2}$  or 0.64?



10) Which amount is larger,  $\frac{6}{9}$  or 0.52?



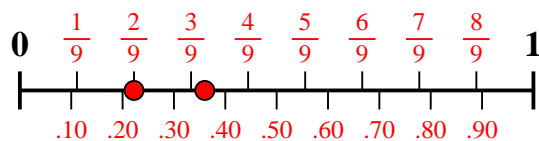
**Answers**

1. \_\_\_\_\_
2. \_\_\_\_\_
3. \_\_\_\_\_
4. \_\_\_\_\_
5. \_\_\_\_\_
6. \_\_\_\_\_
7. \_\_\_\_\_
8. \_\_\_\_\_
9. \_\_\_\_\_
10. \_\_\_\_\_

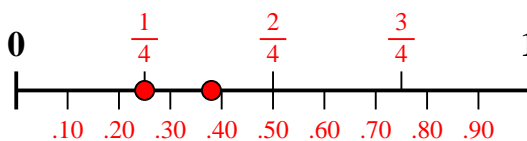


Use the number line to solve each problem.

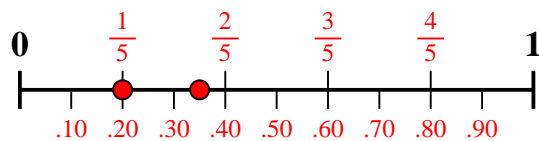
1) Which amount is larger,  $\frac{2}{9}$  or 0.36?



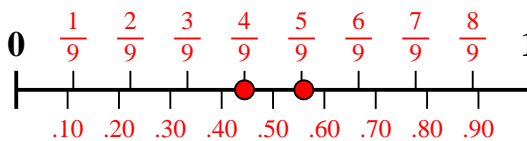
2) Which amount is larger,  $\frac{1}{4}$  or 0.38?



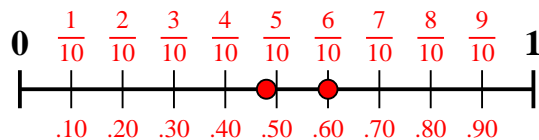
3) Which amount is larger,  $\frac{1}{5}$  or 0.35?



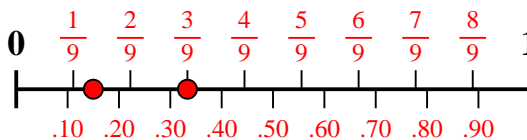
4) Which amount is larger,  $\frac{4}{9}$  or 0.56?



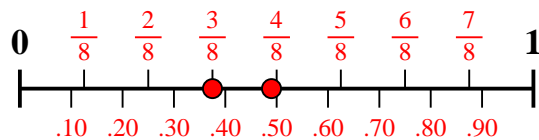
5) Which amount is larger,  $\frac{6}{10}$  or 0.48?



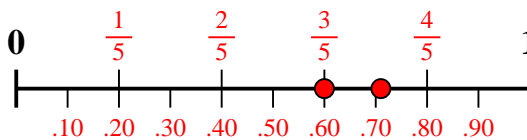
6) Which amount is larger,  $\frac{3}{9}$  or 0.15?



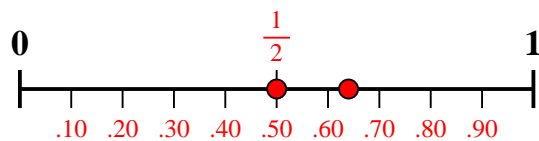
7) Which amount is larger,  $\frac{3}{8}$  or 0.49?



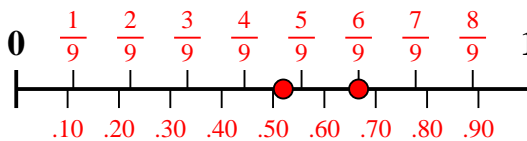
8) Which amount is larger,  $\frac{3}{5}$  or 0.71?



9) Which amount is larger,  $\frac{1}{2}$  or 0.64?



10) Which amount is larger,  $\frac{6}{9}$  or 0.52?



Answers

1. **0.36**

2. **0.38**

3. **0.35**

4. **0.56**

5.  **$\frac{6}{10}$**

6.  **$\frac{3}{9}$**

7. **0.49**

8. **0.71**

9. **0.64**

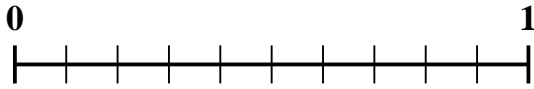
10.  **$\frac{6}{9}$**



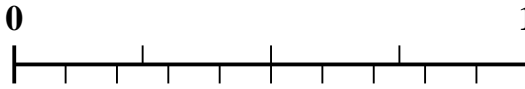


Use the number line to solve each problem.

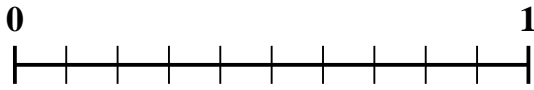
1) Which amount is larger,  $\frac{6}{10}$  or 0.47?



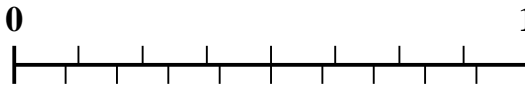
2) Which amount is larger,  $\frac{3}{4}$  or 0.89?



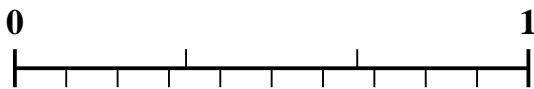
3) Which amount is larger,  $\frac{5}{10}$  or 0.6?



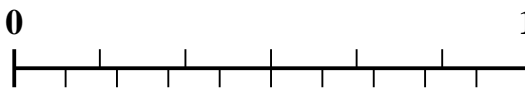
4) Which amount is larger,  $\frac{7}{8}$  or 0.78?



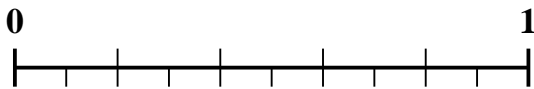
5) Which amount is larger,  $\frac{1}{3}$  or 0.19?



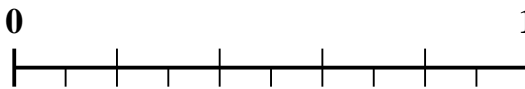
6) Which amount is larger,  $\frac{2}{6}$  or 0.44?



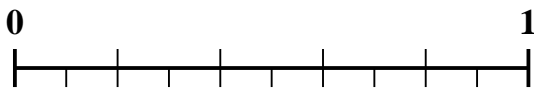
7) Which amount is larger,  $\frac{3}{5}$  or 0.43?



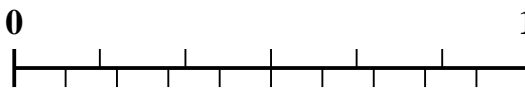
8) Which amount is larger,  $\frac{2}{5}$  or 0.56?



9) Which amount is larger,  $\frac{4}{5}$  or 0.69?



10) Which amount is larger,  $\frac{4}{6}$  or 0.78?



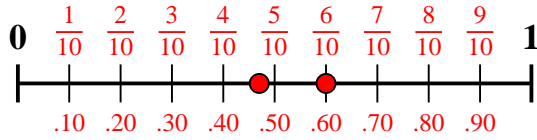
**Answers**

1. \_\_\_\_\_
2. \_\_\_\_\_
3. \_\_\_\_\_
4. \_\_\_\_\_
5. \_\_\_\_\_
6. \_\_\_\_\_
7. \_\_\_\_\_
8. \_\_\_\_\_
9. \_\_\_\_\_
10. \_\_\_\_\_

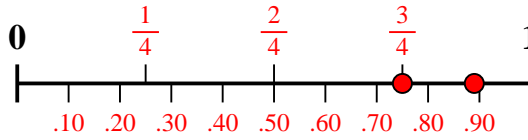


Use the number line to solve each problem.

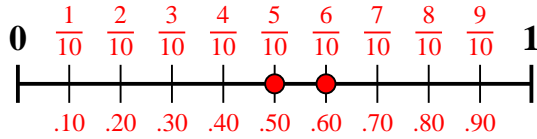
1) Which amount is larger,  $\frac{6}{10}$  or 0.47?



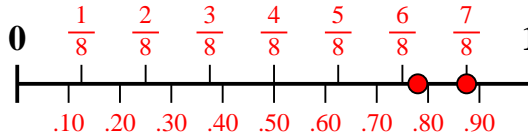
2) Which amount is larger,  $\frac{3}{4}$  or 0.89?



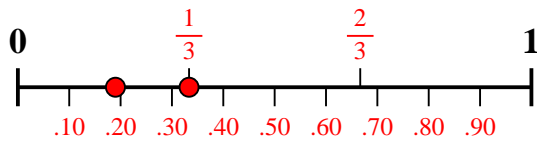
3) Which amount is larger,  $\frac{5}{10}$  or 0.6?



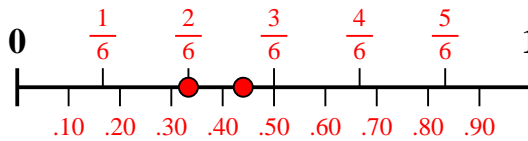
4) Which amount is larger,  $\frac{7}{8}$  or 0.78?



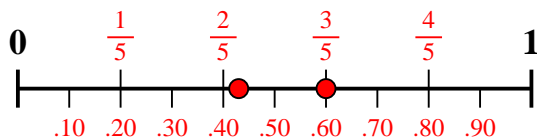
5) Which amount is larger,  $\frac{1}{3}$  or 0.19?



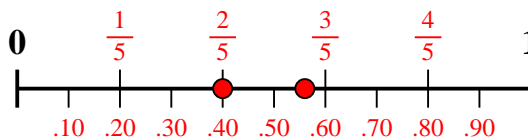
6) Which amount is larger,  $\frac{2}{6}$  or 0.44?



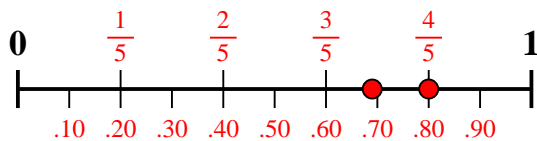
7) Which amount is larger,  $\frac{3}{5}$  or 0.43?



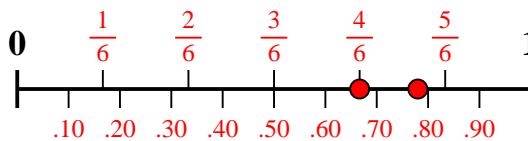
8) Which amount is larger,  $\frac{2}{5}$  or 0.56?



9) Which amount is larger,  $\frac{4}{5}$  or 0.69?



10) Which amount is larger,  $\frac{4}{6}$  or 0.78?



Answers

1.  $\frac{6}{10}$

2. **0.89**

3. **0.6**

4.  $\frac{7}{8}$

5.  $\frac{1}{3}$

6. **0.44**

7.  $\frac{3}{5}$

8. **0.56**

9.  $\frac{4}{5}$

10. **0.78**



Use the number line to solve each problem.

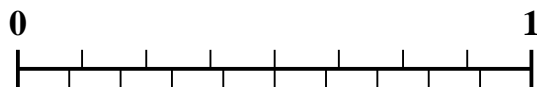
1) Which amount is larger,  $\frac{5}{7}$  or 0.6?



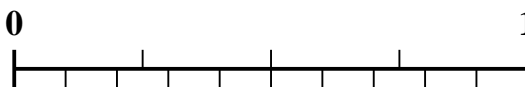
2) Which amount is larger,  $\frac{3}{7}$  or 0.24?




3) Which amount is larger,  $\frac{4}{8}$  or 0.4?



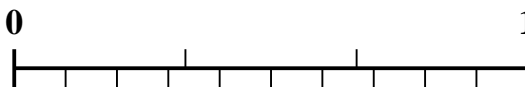
4) Which amount is larger,  $\frac{1}{4}$  or 0.4?



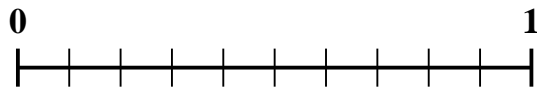
5) Which amount is larger,  $\frac{5}{10}$  or 0.64?



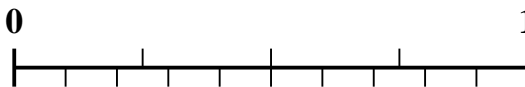
6) Which amount is larger,  $\frac{2}{3}$  or 0.79?



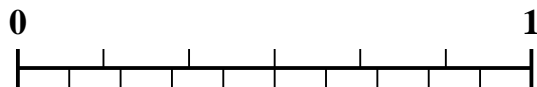
7) Which amount is larger,  $\frac{6}{10}$  or 0.42?



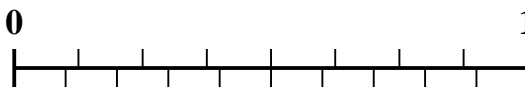
8) Which amount is larger,  $\frac{3}{4}$  or 0.9?



9) Which amount is larger,  $\frac{4}{6}$  or 0.57?



10) Which amount is larger,  $\frac{2}{8}$  or 0.39?



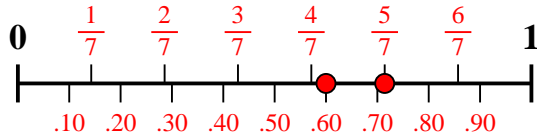
Answers

1. \_\_\_\_\_
2. \_\_\_\_\_
3. \_\_\_\_\_
4. \_\_\_\_\_
5. \_\_\_\_\_
6. \_\_\_\_\_
7. \_\_\_\_\_
8. \_\_\_\_\_
9. \_\_\_\_\_
10. \_\_\_\_\_

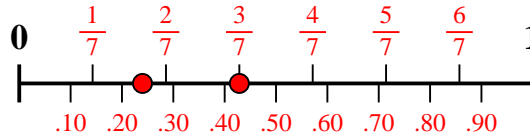


Use the number line to solve each problem.

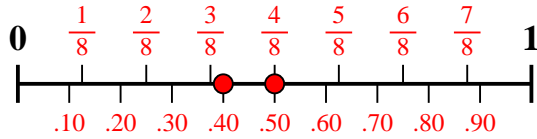
1) Which amount is larger,  $\frac{5}{7}$  or 0.6?



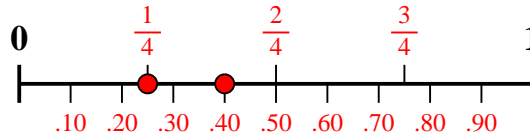
2) Which amount is larger,  $\frac{3}{7}$  or 0.24?



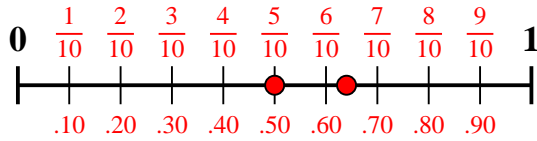
3) Which amount is larger,  $\frac{4}{8}$  or 0.4?



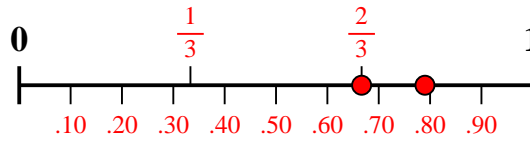
4) Which amount is larger,  $\frac{1}{4}$  or 0.4?



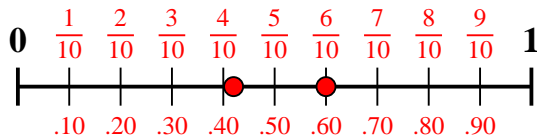
5) Which amount is larger,  $\frac{5}{10}$  or 0.64?



6) Which amount is larger,  $\frac{2}{3}$  or 0.79?



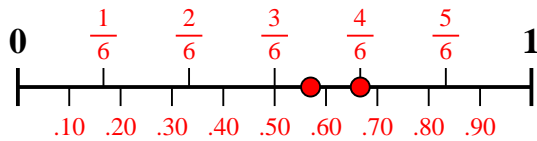
7) Which amount is larger,  $\frac{6}{10}$  or 0.42?



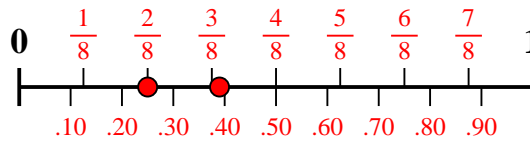
8) Which amount is larger,  $\frac{3}{4}$  or 0.9?



9) Which amount is larger,  $\frac{4}{6}$  or 0.57?



10) Which amount is larger,  $\frac{2}{8}$  or 0.39?



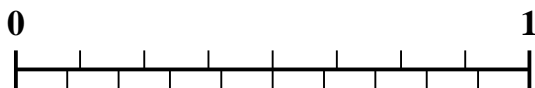
**Answers**

1.  $\frac{5}{7}$
2.  $\frac{3}{7}$
3.  $\frac{4}{8}$
4. **0.4**
5. **0.64**
6. **0.79**
7.  $\frac{6}{10}$
8. **0.9**
9.  $\frac{4}{6}$
10. **0.39**



Use the number line to solve each problem.


1) Which amount is larger,  $\frac{4}{8}$  or 0.35?



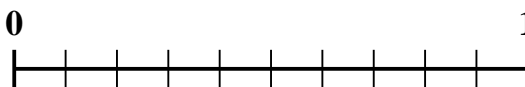
2) Which amount is larger,  $\frac{5}{9}$  or 0.76?



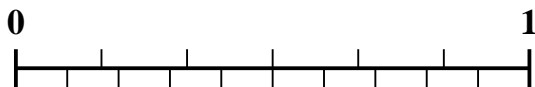
3) Which amount is larger,  $\frac{2}{5}$  or 0.56?



4) Which amount is larger,  $\frac{7}{10}$  or 0.53?




5) Which amount is larger,  $\frac{3}{6}$  or 0.4?



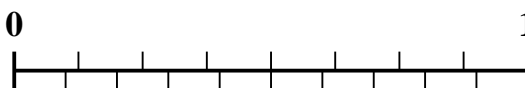
6) Which amount is larger,  $\frac{6}{9}$  or 0.57?




7) Which amount is larger,  $\frac{1}{3}$  or 0.5?



8) Which amount is larger,  $\frac{3}{8}$  or 0.24?



9) Which amount is larger,  $\frac{2}{3}$  or 0.85?



10) Which amount is larger,  $\frac{2}{9}$  or 0.11?



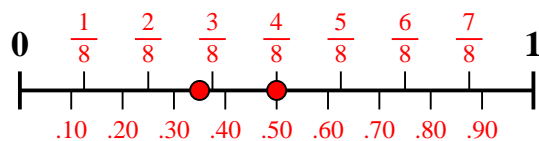
**Answers**

1. \_\_\_\_\_
2. \_\_\_\_\_
3. \_\_\_\_\_
4. \_\_\_\_\_
5. \_\_\_\_\_
6. \_\_\_\_\_
7. \_\_\_\_\_
8. \_\_\_\_\_
9. \_\_\_\_\_
10. \_\_\_\_\_

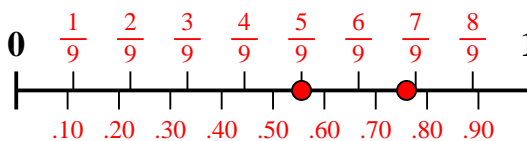


Use the number line to solve each problem.

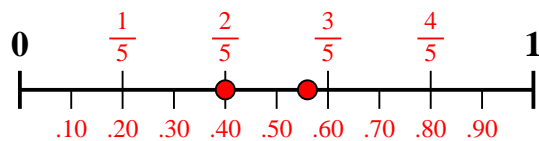
1) Which amount is larger,  $\frac{4}{8}$  or 0.35?



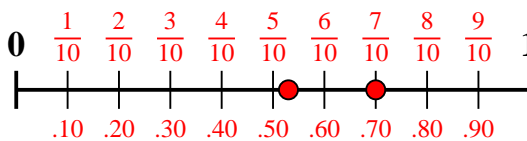
2) Which amount is larger,  $\frac{5}{9}$  or 0.76?



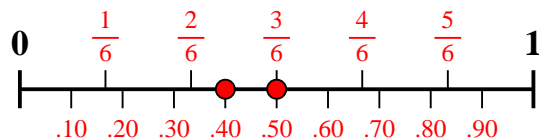
3) Which amount is larger,  $\frac{2}{5}$  or 0.56?



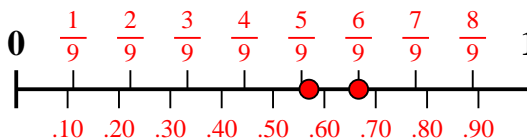
4) Which amount is larger,  $\frac{7}{10}$  or 0.53?



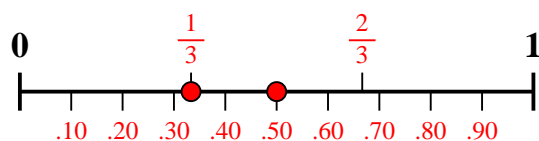
5) Which amount is larger,  $\frac{3}{6}$  or 0.4?



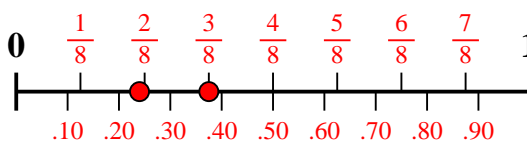
6) Which amount is larger,  $\frac{6}{9}$  or 0.57?



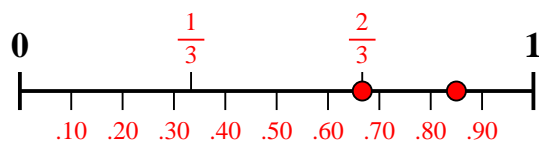
7) Which amount is larger,  $\frac{1}{3}$  or 0.5?



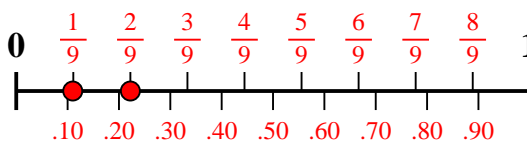
8) Which amount is larger,  $\frac{3}{8}$  or 0.24?



9) Which amount is larger,  $\frac{2}{3}$  or 0.85?



10) Which amount is larger,  $\frac{2}{9}$  or 0.11?



**Answers**

1.  $\frac{4}{8}$
2. **0.76**
3. **0.56**
4.  $\frac{7}{10}$
5.  $\frac{3}{6}$
6.  $\frac{6}{9}$
7. **0.5**
8.  $\frac{3}{8}$
9. **0.85**
10.  $\frac{2}{9}$

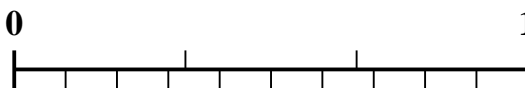


Use the number line to solve each problem.

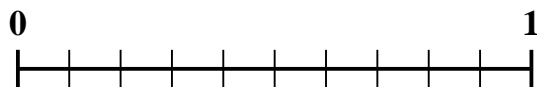
1) Which amount is larger,  $\frac{3}{7}$  or 0.23?



2) Which amount is larger,  $\frac{2}{3}$  or 0.82?



3) Which amount is larger,  $\frac{1}{10}$  or 0.21?



4) Which amount is larger,  $\frac{4}{6}$  or 0.77?



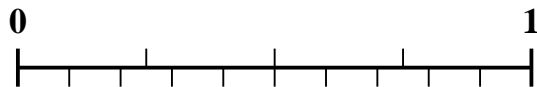
5) Which amount is larger,  $\frac{6}{7}$  or 0.73?



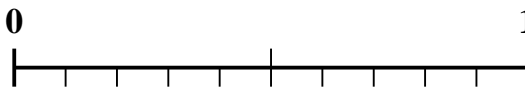
6) Which amount is larger,  $\frac{2}{4}$  or 0.6?



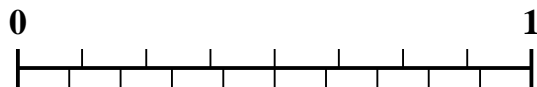
7) Which amount is larger,  $\frac{3}{4}$  or 0.88?



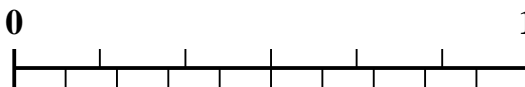
8) Which amount is larger,  $\frac{1}{2}$  or 0.69?



9) Which amount is larger,  $\frac{3}{8}$  or 0.19?



10) Which amount is larger,  $\frac{3}{6}$  or 0.35?



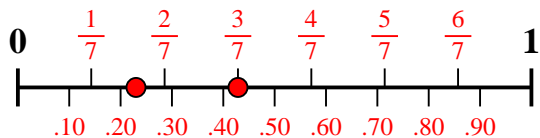
**Answers**

1. \_\_\_\_\_
2. \_\_\_\_\_
3. \_\_\_\_\_
4. \_\_\_\_\_
5. \_\_\_\_\_
6. \_\_\_\_\_
7. \_\_\_\_\_
8. \_\_\_\_\_
9. \_\_\_\_\_
10. \_\_\_\_\_

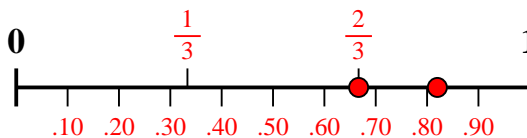


Use the number line to solve each problem.

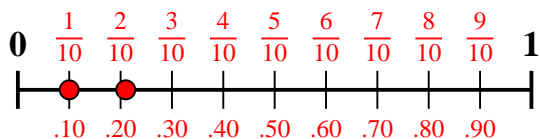
1) Which amount is larger,  $\frac{3}{7}$  or 0.23?



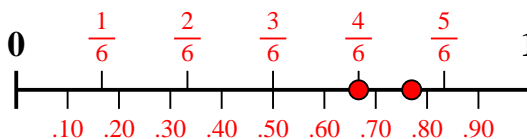
2) Which amount is larger,  $\frac{2}{3}$  or 0.82?



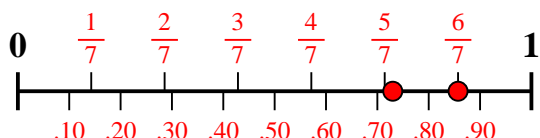
3) Which amount is larger,  $\frac{1}{10}$  or 0.21?



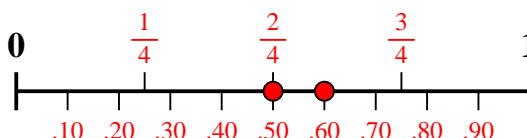
4) Which amount is larger,  $\frac{4}{6}$  or 0.77?



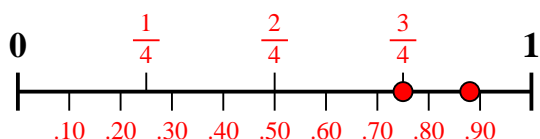
5) Which amount is larger,  $\frac{6}{7}$  or 0.73?



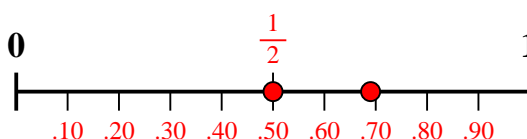
6) Which amount is larger,  $\frac{2}{4}$  or 0.6?



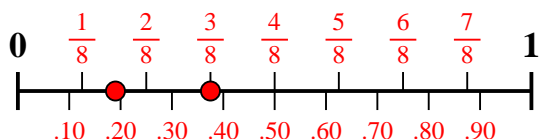
7) Which amount is larger,  $\frac{3}{4}$  or 0.88?



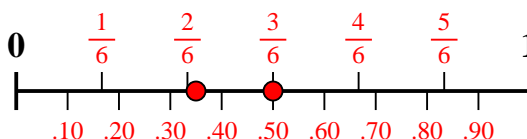
8) Which amount is larger,  $\frac{1}{2}$  or 0.69?



9) Which amount is larger,  $\frac{3}{8}$  or 0.19?



10) Which amount is larger,  $\frac{3}{6}$  or 0.35?



Answers

1.  $\frac{3}{7}$
2. **0.82**
3. **0.21**
4. **0.77**
5.  $\frac{6}{7}$
6. **0.6**
7. **0.88**
8. **0.69**
9.  $\frac{3}{8}$
10.  $\frac{3}{6}$





Use the number line to solve each problem.


1) Which amount is larger,  $\frac{1}{7}$  or 0.31?



2) Which amount is larger,  $\frac{4}{6}$  or 0.54?




3) Which amount is larger,  $\frac{2}{3}$  or 0.82?



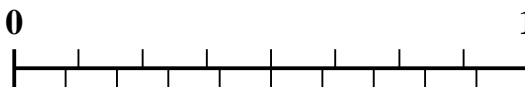
4) Which amount is larger,  $\frac{1}{2}$  or 0.68?




5) Which amount is larger,  $\frac{2}{4}$  or 0.35?



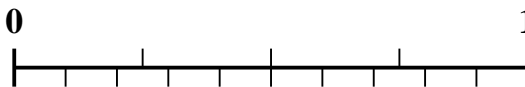
6) Which amount is larger,  $\frac{3}{8}$  or 0.52?



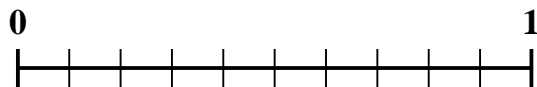
7) Which amount is larger,  $\frac{1}{3}$  or 0.49?



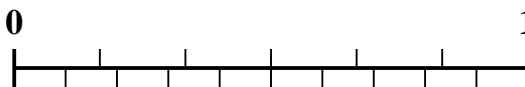
8) Which amount is larger,  $\frac{3}{4}$  or 0.88?



9) Which amount is larger,  $\frac{4}{10}$  or 0.56?



10) Which amount is larger,  $\frac{3}{6}$  or 0.4?



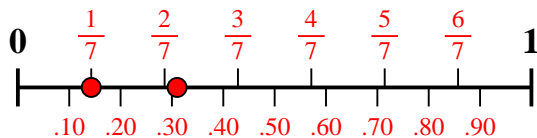
Answers

1. \_\_\_\_\_
2. \_\_\_\_\_
3. \_\_\_\_\_
4. \_\_\_\_\_
5. \_\_\_\_\_
6. \_\_\_\_\_
7. \_\_\_\_\_
8. \_\_\_\_\_
9. \_\_\_\_\_
10. \_\_\_\_\_

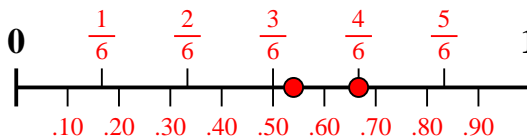


Use the number line to solve each problem.

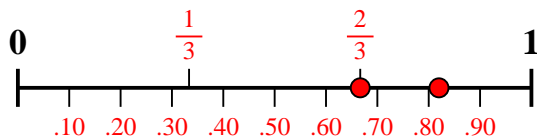
1) Which amount is larger,  $\frac{1}{7}$  or 0.31?



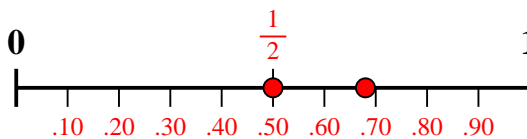
2) Which amount is larger,  $\frac{4}{6}$  or 0.54?



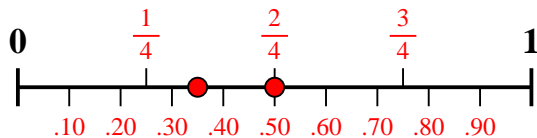
3) Which amount is larger,  $\frac{2}{3}$  or 0.82?



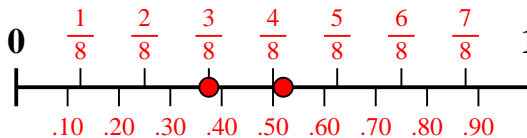
4) Which amount is larger,  $\frac{1}{2}$  or 0.68?



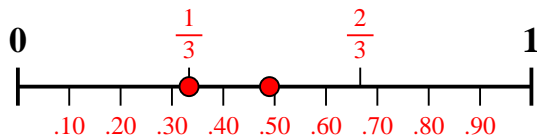
5) Which amount is larger,  $\frac{2}{4}$  or 0.35?



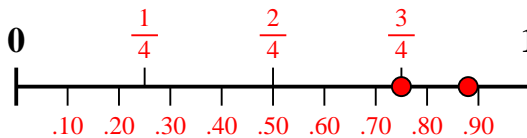
6) Which amount is larger,  $\frac{3}{8}$  or 0.52?



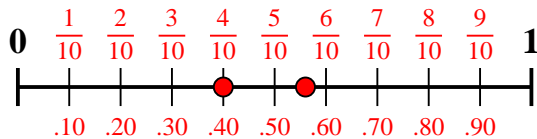
7) Which amount is larger,  $\frac{1}{3}$  or 0.49?



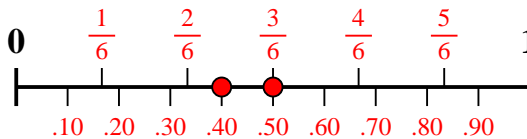
8) Which amount is larger,  $\frac{3}{4}$  or 0.88?



9) Which amount is larger,  $\frac{4}{10}$  or 0.56?



10) Which amount is larger,  $\frac{3}{6}$  or 0.4?



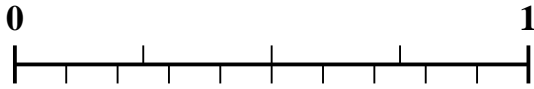
Answers

1. 0.31
2.  $\frac{4}{6}$
3. 0.82
4. 0.68
5.  $\frac{2}{4}$
6. 0.52
7. 0.49
8. 0.88
9. 0.56
10.  $\frac{3}{6}$

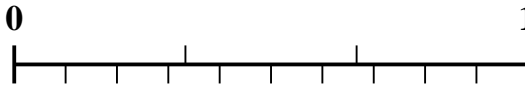


Use the number line to solve each problem.

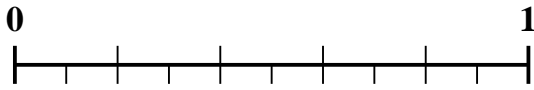
1) Which amount is larger,  $\frac{3}{4}$  or 0.89?



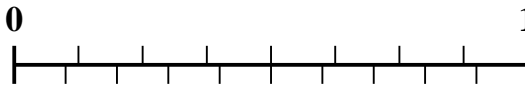
2) Which amount is larger,  $\frac{1}{3}$  or 0.17?



3) Which amount is larger,  $\frac{4}{5}$  or 0.65?



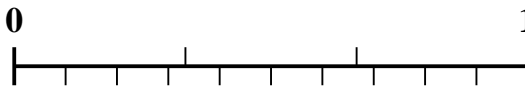
4) Which amount is larger,  $\frac{5}{8}$  or 0.79?



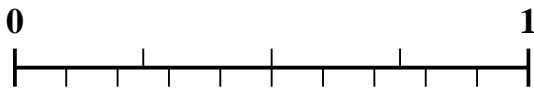
5) Which amount is larger,  $\frac{6}{9}$  or 0.77?



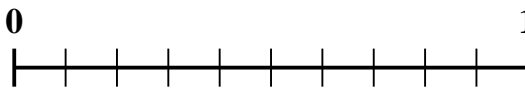
6) Which amount is larger,  $\frac{2}{3}$  or 0.8?



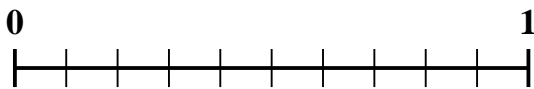
7) Which amount is larger,  $\frac{2}{4}$  or 0.69?



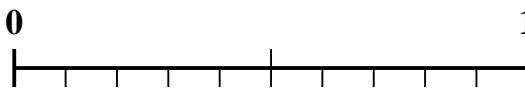
8) Which amount is larger,  $\frac{9}{10}$  or 0.79?



9) Which amount is larger,  $\frac{6}{10}$  or 0.7?



10) Which amount is larger,  $\frac{1}{2}$  or 0.32?



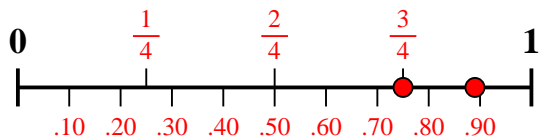
Answers

1. \_\_\_\_\_
2. \_\_\_\_\_
3. \_\_\_\_\_
4. \_\_\_\_\_
5. \_\_\_\_\_
6. \_\_\_\_\_
7. \_\_\_\_\_
8. \_\_\_\_\_
9. \_\_\_\_\_
10. \_\_\_\_\_

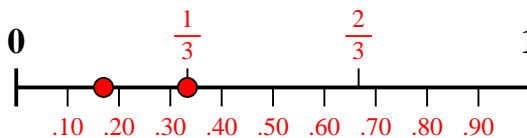


Use the number line to solve each problem.

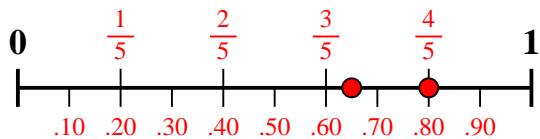
1) Which amount is larger,  $\frac{3}{4}$  or 0.89?



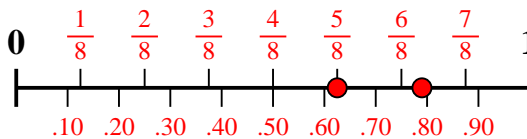
2) Which amount is larger,  $\frac{1}{3}$  or 0.17?



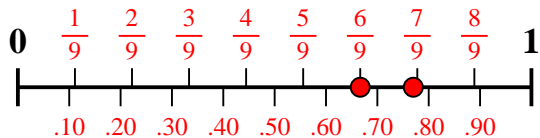
3) Which amount is larger,  $\frac{4}{5}$  or 0.65?



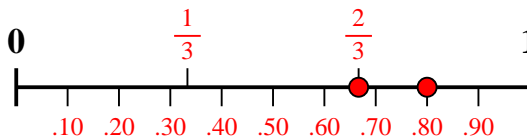
4) Which amount is larger,  $\frac{5}{8}$  or 0.79?



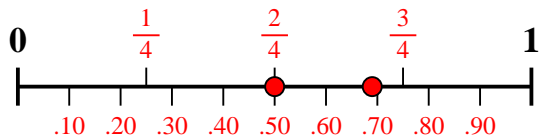
5) Which amount is larger,  $\frac{6}{9}$  or 0.77?



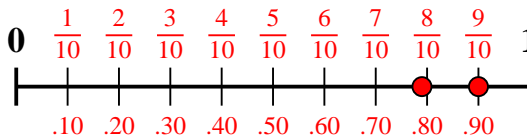
6) Which amount is larger,  $\frac{2}{3}$  or 0.8?



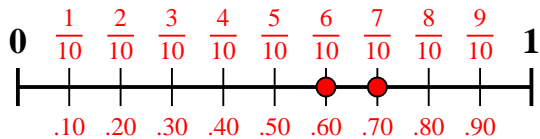
7) Which amount is larger,  $\frac{2}{4}$  or 0.69?



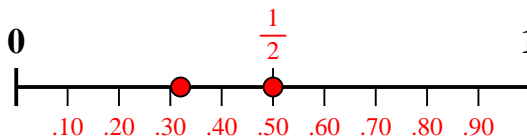
8) Which amount is larger,  $\frac{9}{10}$  or 0.79?



9) Which amount is larger,  $\frac{6}{10}$  or 0.7?



10) Which amount is larger,  $\frac{1}{2}$  or 0.32?



Answers

1. 0.89
2.  $\frac{1}{3}$
3.  $\frac{4}{5}$
4. 0.79
5. 0.77
6. 0.8
7. 0.69
8.  $\frac{9}{10}$
9. 0.7
10.  $\frac{1}{2}$